




CHRISTMAS PUZZLES



Instructions: Determine what each of the Christmas images represent in the following maths problems:



+



=

32



+

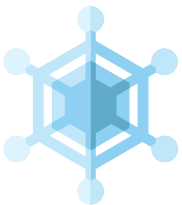


+

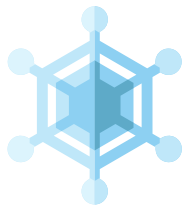


=

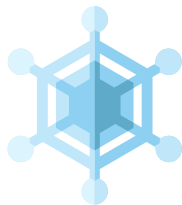
34



+



+

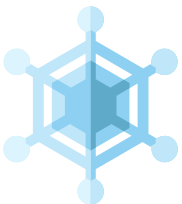


+



=

72




+



+



=



+



+



=

